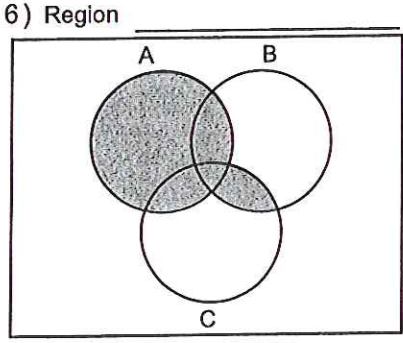
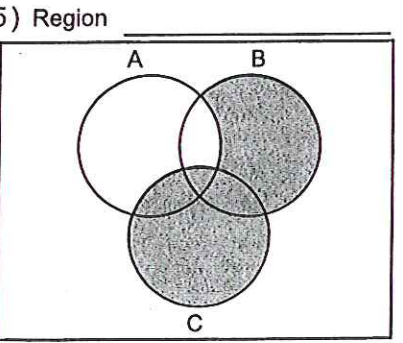
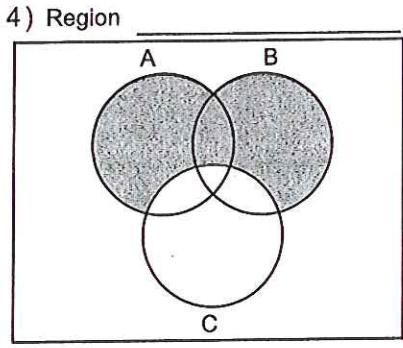
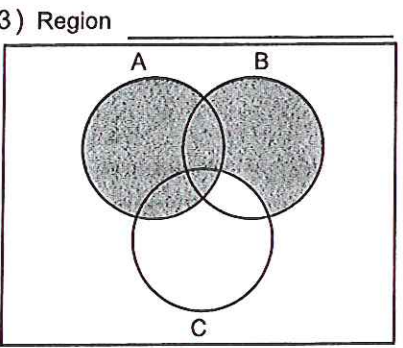
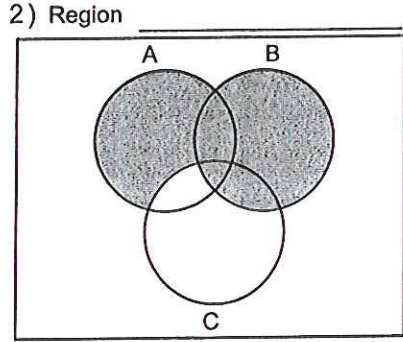
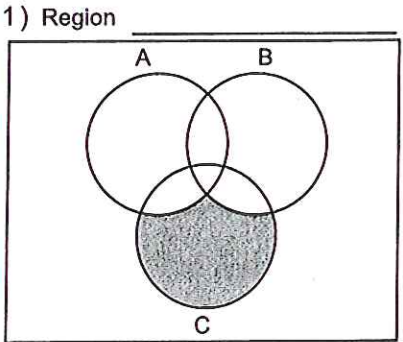


Name : \_\_\_\_\_ Score : \_\_\_\_\_

Teacher : \_\_\_\_\_ Date : \_\_\_\_\_

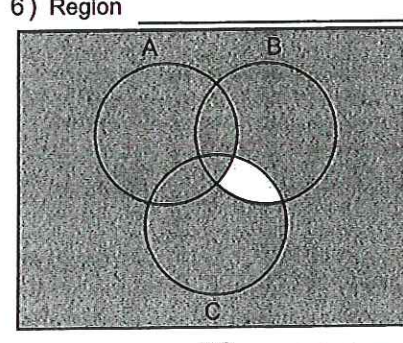
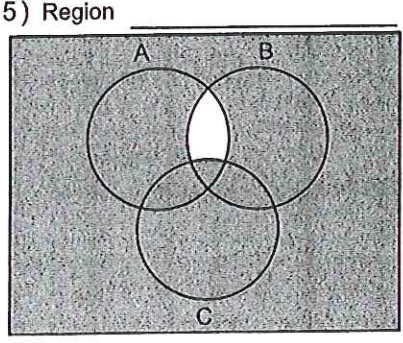
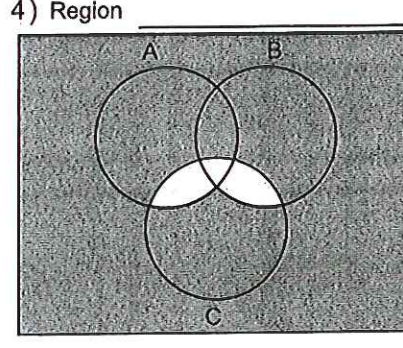
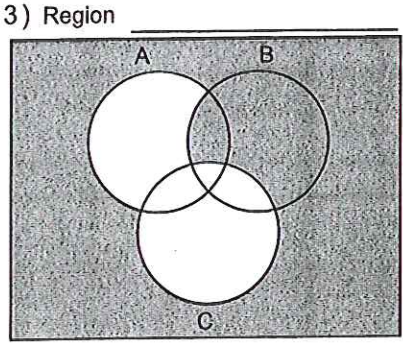
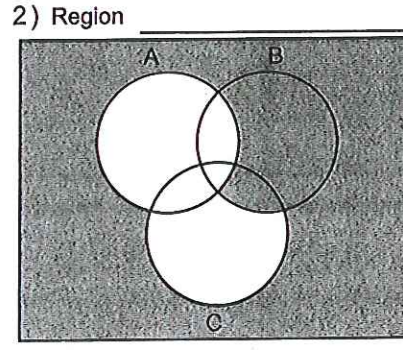
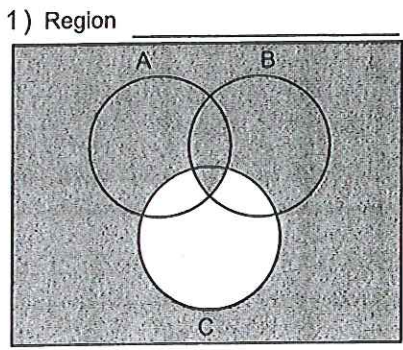
**Name the Shaded Regions for the Venn Diagrams**



Name : \_\_\_\_\_ Score : \_\_\_\_\_

Teacher : \_\_\_\_\_ Date : \_\_\_\_\_

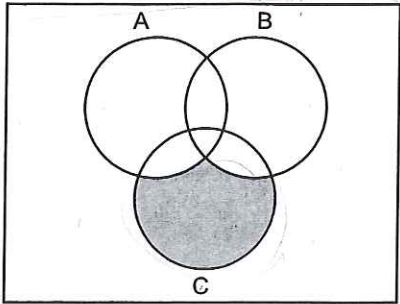
**Name the Shaded Regions for the Venn Diagrams**



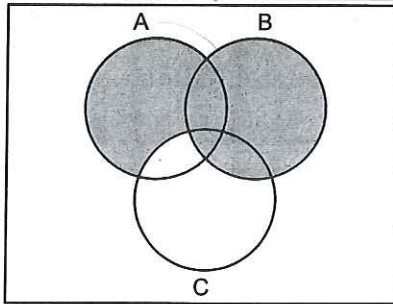
Name : Answer Key Score : \_\_\_\_\_  
 Teacher : \_\_\_\_\_ Date : \_\_\_\_\_

Name the Shaded Regions for the Venn Diagrams

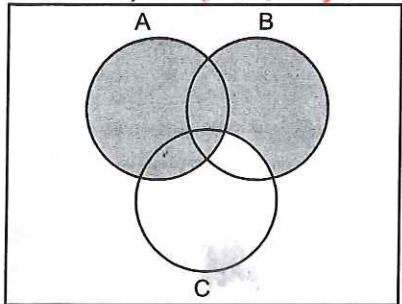
1) Region  $C \cap (\overline{A \cup B})$



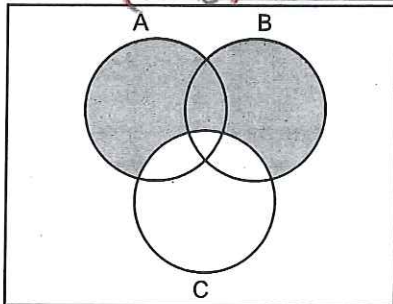
2) Region  $B \cup (\overline{A \cap C})$



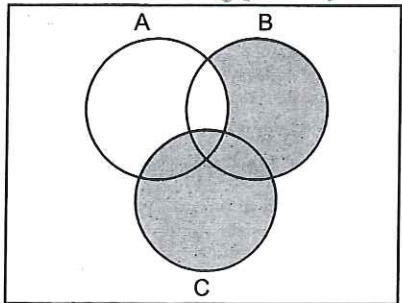
3) Region  $A \cup (\overline{B \cap C})$



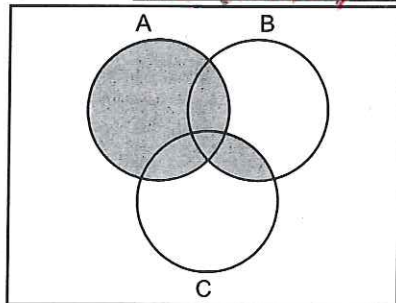
4) Region  $(A \cup B) \cap \overline{C}$



5) Region  $C \cup (\overline{B \cap A})$



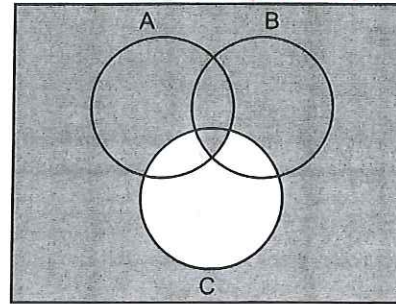
6) Region  $A \cup (\overline{B \cap C})$



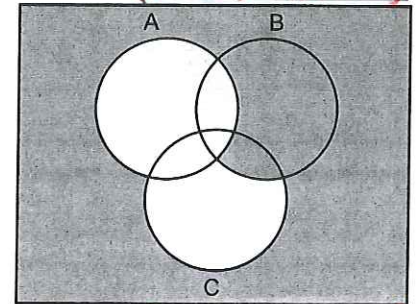
Name : \_\_\_\_\_ Score : \_\_\_\_\_  
 Teacher : \_\_\_\_\_ Date : \_\_\_\_\_

Name the Shaded Regions for the Venn Diagrams

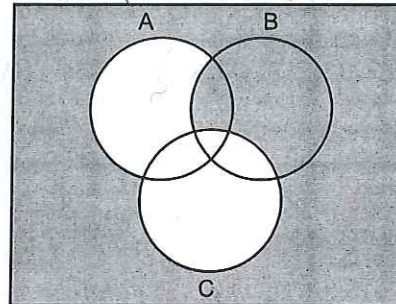
1) Region  $\overline{C} \cup (\overline{B \cap A})$



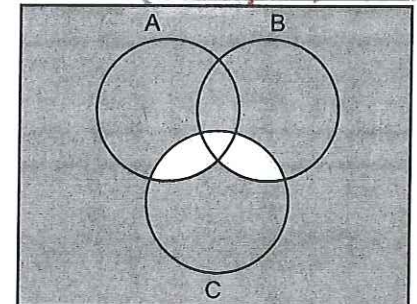
2) Region  $(\overline{A \cap C}) \cup (\overline{B \cap A})$



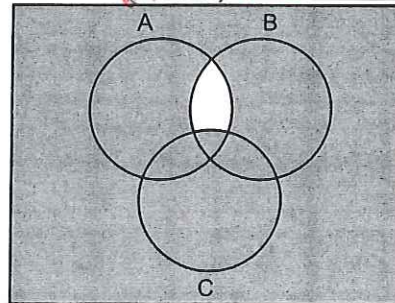
3) Region  $(\overline{A \cap C}) \cup (\overline{B \cap C})$



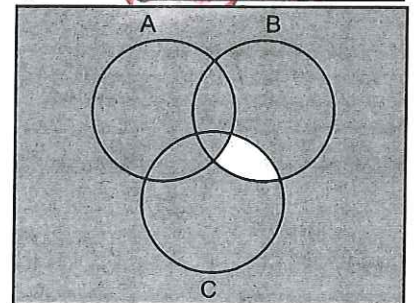
4) Region  $(\overline{B \cap C}) \cup (\overline{A \cap C})$



5) Region  $(\overline{A \cap B}) \cup C$



6) Region  $(\overline{B \cap C}) \cup A$



Note: Some of your answers may differ - there are many options here